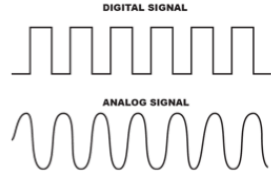








SCIENCE FINISHER

<u>Date:</u>	<u>Question:</u> Your teacher will have a question for you to answer at the end of class. Write the answer in the box below.
2-21-20 2-24-20	Describe a digital or analog device that you own and how you use it?
2-25-20 2-26-20	Draw a... Digital Wave: Analog Wave: <div style="text-align: right;">  </div>
2-27-20 2-28-20	List... 3 analog devices- radio, walkie talkie, clock with hands 3 digital devices- computer, mp3 player, digital clock
3-2-20 3-3-20	Define Kinetic Energy: Energy of Motion Define Potential Energy: Stored Energy
3-4-20 3-5-20	Draw a picture of each simple machine: Lever- Pulley- Inclined Plane- Screw- Wedge- Wheel & Axle <div style="display: flex; justify-content: space-around; align-items: flex-end;"> <div style="text-align: center;"> Wedge</div> <div style="text-align: center;"> Wheel and Axle</div> <div style="text-align: center;"> Lever</div> <div style="text-align: center;"> Inclined Plane</div> <div style="text-align: center;"> Screw</div> <div style="text-align: center;"> Pulley</div> </div>