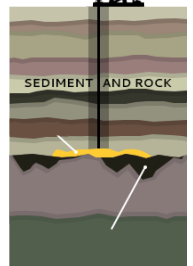
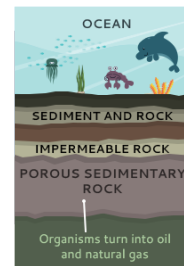
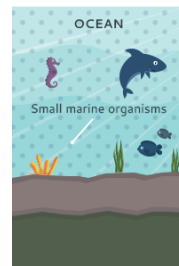
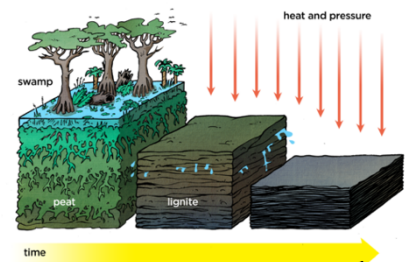
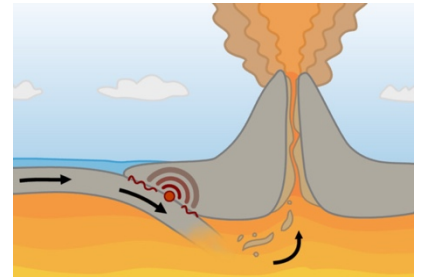


Quiz 8.4.1/8.4.2 Review

Match the resource with the way it was formed.



Renewable

Non-Renewable

Identify areas of the world that have minerals... are they evenly distributed???

